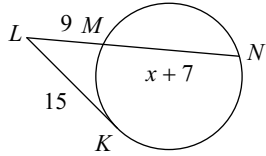


Homework: Segments in Circles - Find the Length

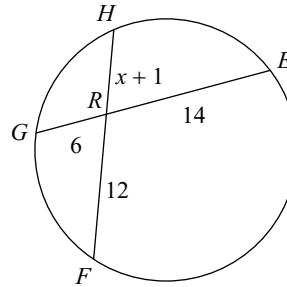
© 2017 Kuta Software LLC. All rights reserved.

Find the measure of the line segment indicated. Assume that lines which appear tangent are tangent.

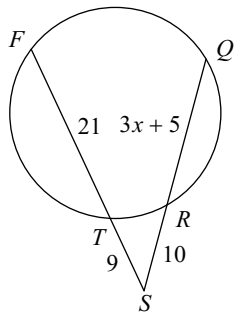
1) Find MN



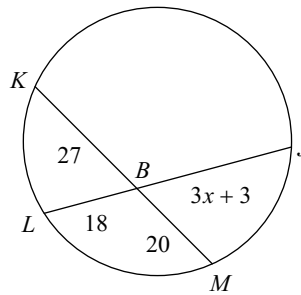
2) Find FH



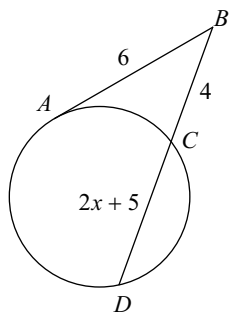
3) Find QS



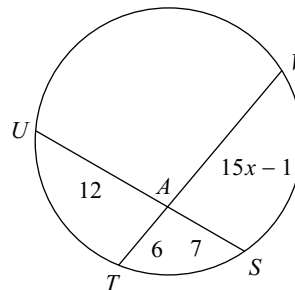
4) Find BJ



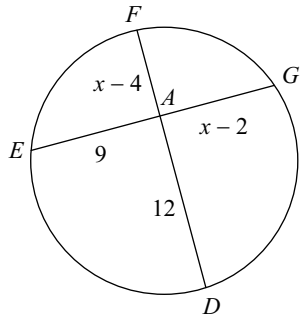
5) Find BD



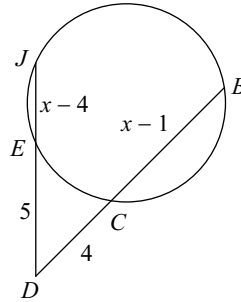
6) Find TV



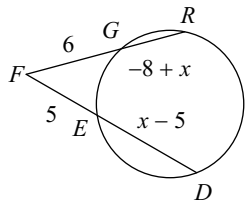
7) Find AG



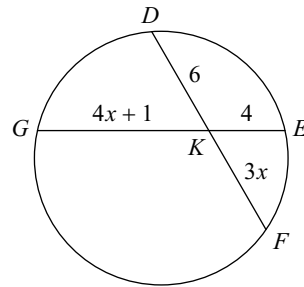
8) Find BD



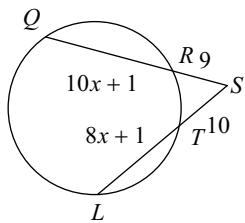
9) Find DF



10) Find KG



11) Find QR



12) Find UN

