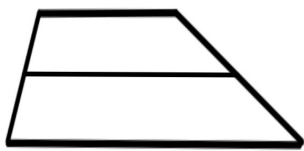



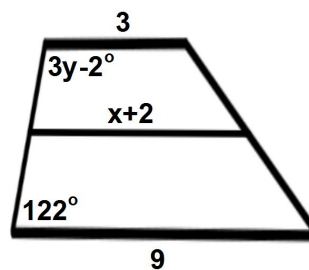
Trapezoid  
Midsegment



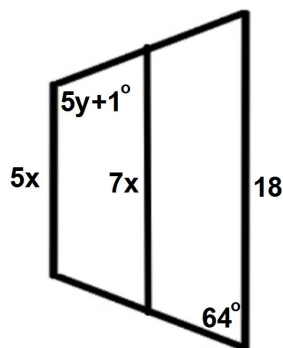
Isosceles  
Trapezoid  
Midsegment



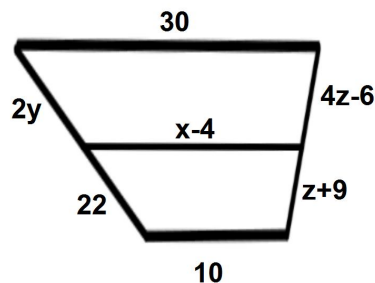
The following is a trapezoid. Solve for  $x$  and  $y$ .



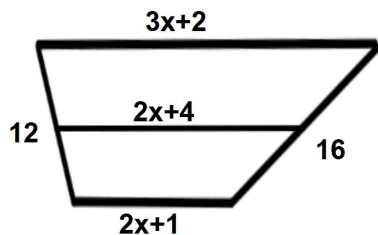
The following is an isosceles trapezoid.  
Solve for  $x$  and  $y$ .



The following is a trapezoid with a midsegment  
drawn. Solve for  $x$ ,  $y$ , and  $z$ .



The following is a trapezoid. Solve for  $x$  and  
the perimeter.



The following is an isosceles trapezoid.  
Solve for  $x$  and  $y$ .

