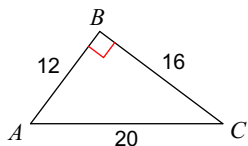


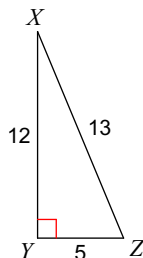
# Trig Ratio Homework: Due Tuesday

**Find the value of each trigonometric ratio.**

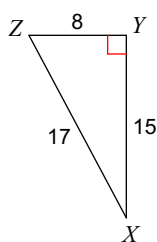
1)  $\tan C$



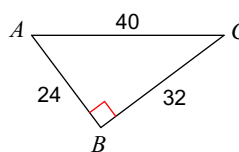
2)  $\cos X$



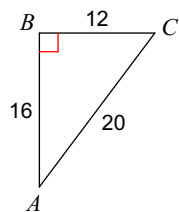
3)  $\cos Z$



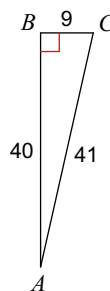
4)  $\cos A$



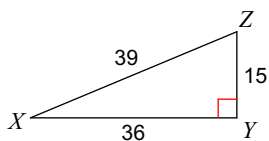
5)  $\sin A$



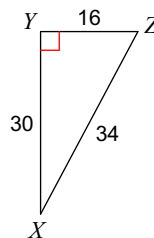
6)  $\tan C$



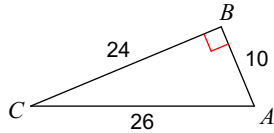
7)  $\tan Z$



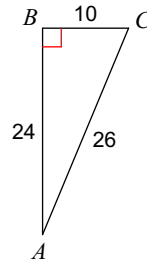
8)  $\sin X$



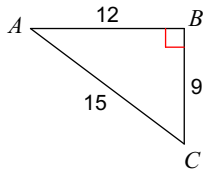
9)  $\tan A$



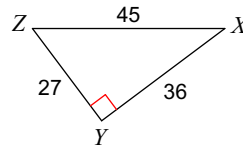
10)  $\cos C$



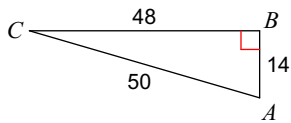
11)  $\tan C$



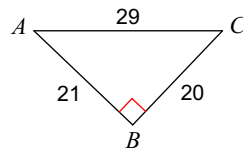
12)  $\cos Z$



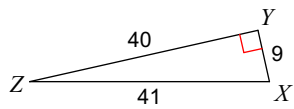
13)  $\tan C$



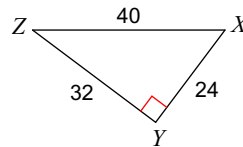
14)  $\cos A$



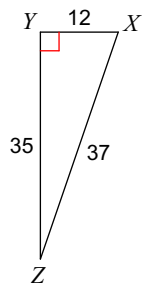
15)  $\sin X$



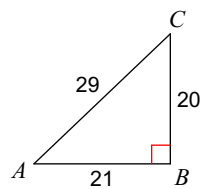
16)  $\sin Z$



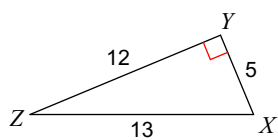
17)  $\tan Z$



18)  $\sin C$



19)  $\tan Z$



20)  $\cos C$

